



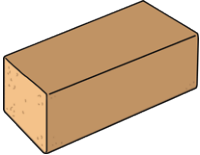




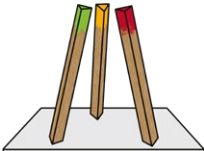








Identify 2D Shapes and 3D Objects

Write the correct name of each 2D shape and 3D object below.

 <p>_____</p>	 <p>_____</p>	 <p>_____</p>	 <p>_____</p>
 <p>_____</p> <p>_____</p>	 <p>_____</p>	 <p>_____</p>	 <p>_____</p>
 <p>_____</p>	 <p>_____</p> <p>_____</p>	 <p>_____</p>	 <p>_____</p>
 <p>_____</p> <p>_____</p>	 <p>_____</p>	 <p>_____</p>	 <p>_____</p>

Challenge:

Which of these statements are correct?

- A rectangle has equal edges.
- A cube has 6 faces.
- A hexagon has 5 edges.
- A triangular prism can roll.

Explain your reasoning.

I know this because _____
